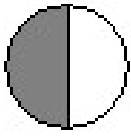


Les fractions

Après avoir visionné le petit film sur le site : [la classe d'Alain](http://laclassed'alain.com), essayez de faire ces petits exercices.

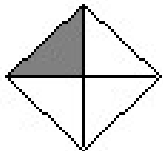
1. Indique les fractions correspondantes à chaque figure :




A




B



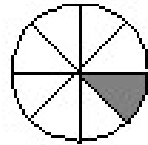
C



D

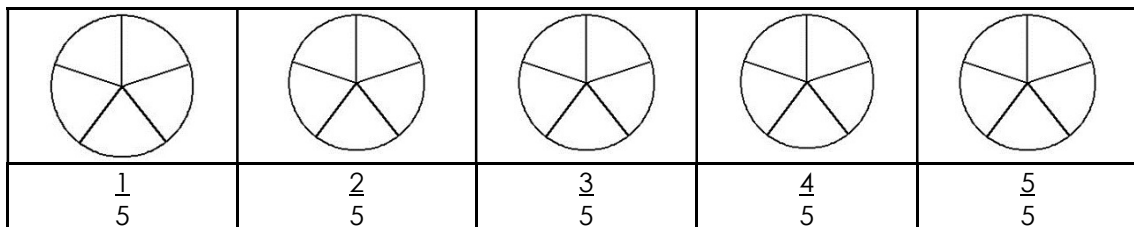
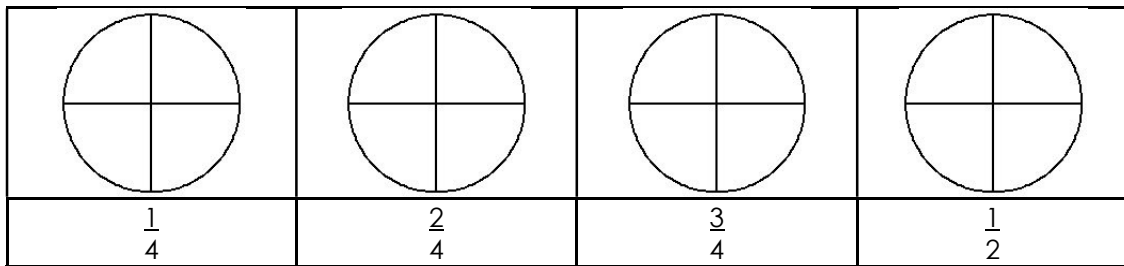


E

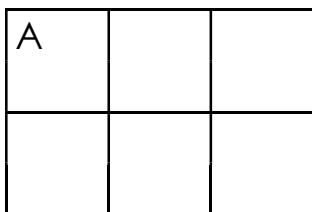


F


2. Colorie la fraction qui est demandée :



3. Colorie la fraction qui est demandée :

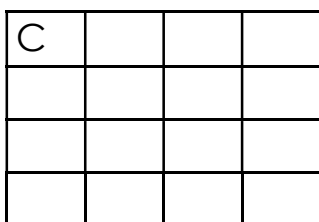


$:\frac{2}{6}$



$:\frac{1}{4}$

$\frac{1}{4} :$



$\frac{2}{8} :$

